

A note on a problem involving a square in a curvilinear triangle

HIROSHI OKUMURA

Abstract. A problem involving a square in the curvilinear triangle made by two touching congruent circles and their common tangent is generalized.

Keywords. square in a curvilinear triangle

Mathematics Subject Classification (2010). 01A27, 51M04

Let α_1 and α_2 be touching circles of radius a with external common tangent t . In this note we consider the following problem [1, 4, 5] (see Figure 1).

Problem 1. $ABCD$ is a square such that the side DA lies on t and the points C and B lie on α_1 and α_2 , respectively. Show that $2a = 5|AB|$.

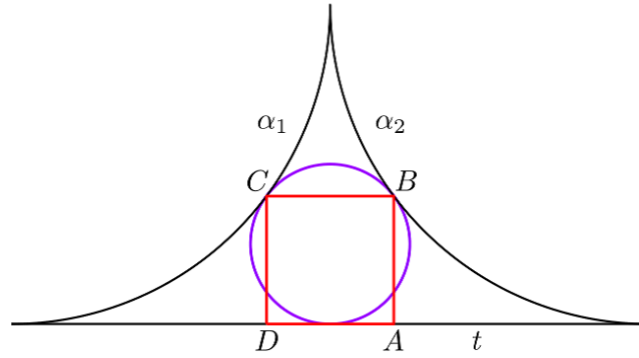


Figure 1.

If $\gamma_1, \gamma_2, \dots, \gamma_n$ are congruent circles touching a line s from the same side such that γ_1 and γ_2 touch and γ_i ($i = 3, 4, \dots, n$) touches γ_{i-1} from the side opposite to γ_1 , then $\gamma_1, \gamma_2, \dots, \gamma_n$ are called congruent circles on s . The curvilinear triangle made by α_1, α_2 and t is denoted by Δ . The incircle of Δ touches α_1 and α_2 at C and B , respectively as in Figure 1. Indeed the problem is generalized as follows (see Figure 2):

Theorem 1. *If $\beta_1, \beta_2, \dots, \beta_n$ are congruent circles on t lying in Δ such that β_1 touches α_1 at a point C and β_n touches α_2 at a point B and A is the foot of perpendicular from B to t , then the following relations hold.*

- (i) $n|AB| = |BC|$.
- (ii) $2a = \left((\sqrt{n} + 1)^2 + 1 \right) |AB|$.

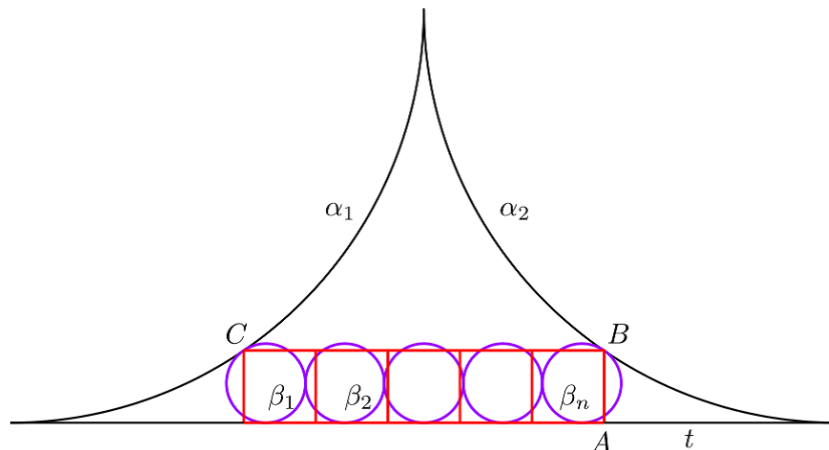
Proof. Let b be the radius of β_1 . By Theorem 5.1 in [2] we have

$$(1) \quad a = (\sqrt{n} + 1)^2 b.$$

Let $d = |AB|$. Since C divides the segment joining the centers of α_1 and β_1 in the ratio $a : b$ internally, we have

$$(2) \quad \frac{d - b}{b} = \frac{a - b}{a + b}.$$

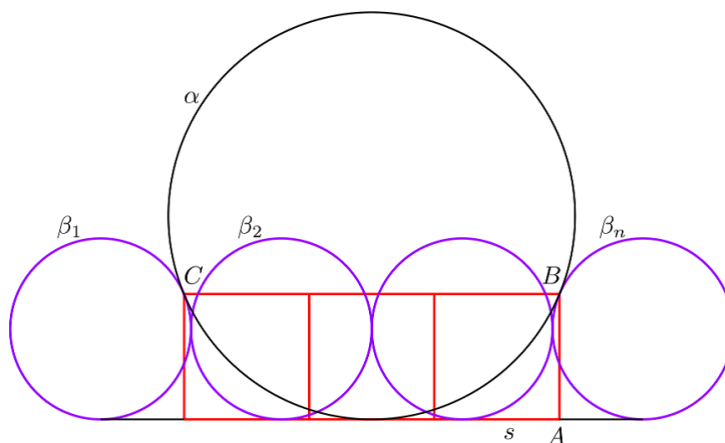
Eliminating b from (1) and (2), and solving the resulting equation for d , we get $d = 2a/(1 + (1 \pm \sqrt{n})^2)$. But in the minus sign case we get $2b - d = 2a(1 - 4\sqrt{n})/(n^2 - n + 2\sqrt{n} + 2) < 0$ by (1). Hence $d = 2a/(1 + (1 + \sqrt{n})^2)$. This proves (ii). Let $|BC| = 2h$. Then from the right triangle formed by the line BC , the segment joining the centers of α_1 and β_1 , and the perpendicular from the center of α_1 to BC , we get $(a - h)^2 + (a - d)^2 = a^2$. Solving the equation for h , we have $h = a - \sqrt{(2a - d)d} = an/(1 + (1 + \sqrt{n})^2)$. This proves (i). \square

Figure 2: $n = 5$

The figure consisting of $\alpha_1, \alpha_2, \beta_1, \beta_2, \dots, \beta_n$ and t is denoted by $\mathcal{B}(n)$ and considered in [2]. Since the inradius of Δ equals $a/4$, the next theorem is also a generalization of Problem 1 (see Figure 3).

Theorem 2. Let $\beta_1, \beta_2, \dots, \beta_n$ be congruent circles on a line s . If a circle α of radius a touches s and β_1 and β_n externally at points C and B , respectively, A is the foot of perpendicular from B to s , then the following relations hold.

- (i) $(n - 1)|AB| = |BC|$.
- (ii) $2a = ((n - 1)^2 + 4)|AB|/4$.

Figure 3: $n = 4$

Theorem 2 is proved in a similar way as Theorem 1 using the fact that the ratio of the radii of α and β_1 equals $(n - 1)^2 : 4$ [3]. The figure consisting of $\alpha, \beta_1, \beta_2, \dots, \beta_n$ and s is denoted by $\mathcal{A}(n)$ and considered in [2].

REFERENCES

- [1] Aida ed., Sampō Tenshōhō, 1788, Tohoku Univ. WDB,
http://www.i-repository.net/il/meta_pub/G0000398wasan_4100002292.
- [2] H. Okumura, Configurations of congruent circles on a line, Sangaku J. Math., **1** (2017) 24–34.
- [3] H. Okumura, Variatios of the ratio 1 : 4, Math. and Informatics Quarterly, **3**(4) (1993) 162–166.
- [4] Enrui Tekitō Shū, Tohoku Univ. WDB,
http://www.i-repository.net/il/meta_pub/G0000398wasan_4100003918.
- [5] Yōjutsu Kugōhyū, Tohoku Univ. WDB,
http://www.i-repository.net/il/meta_pub/G0000398wasan_4100007186.

Tohoku Univ. WDB is short for Tohoku University Wasan Material Database.